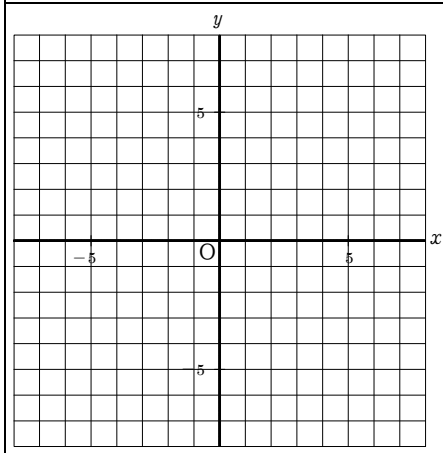


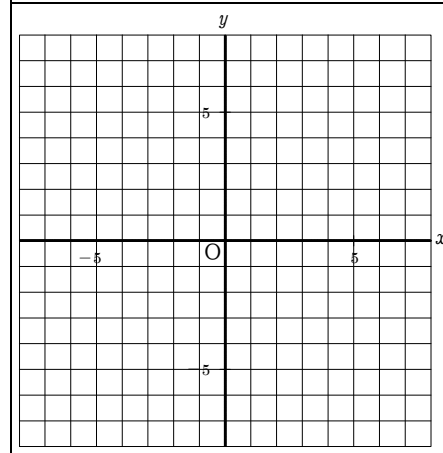
ミニ復習	比例・反比例のグラフ 1
氏名	

① $y = 2x$	② $y = -\frac{2}{3}x$
③ $y = \frac{12}{x}$	



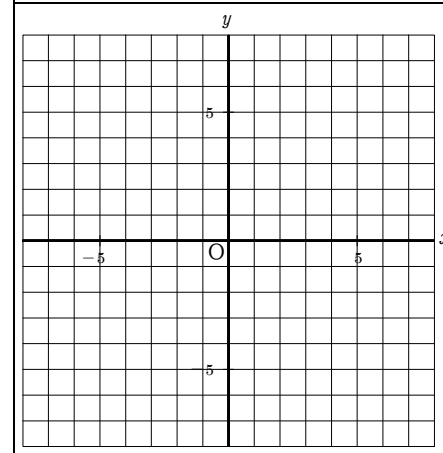
ミニ復習	比例・反比例のグラフ 3
氏名	

① $y = 4x$	② $y = -\frac{1}{2}x$
③ $y = \frac{24}{x}$	



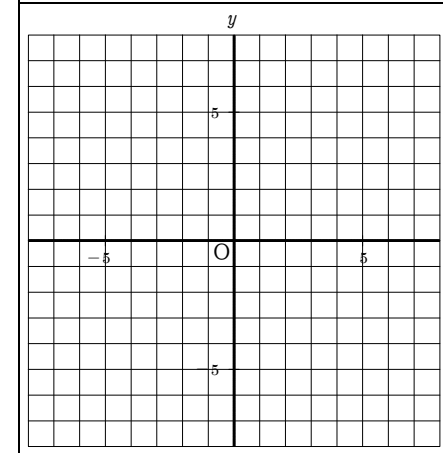
ミニ復習	比例・反比例のグラフ 5
氏名	

① $y = 3x$	② $y = -\frac{3}{5}x$
③ $y = \frac{6}{x}$	



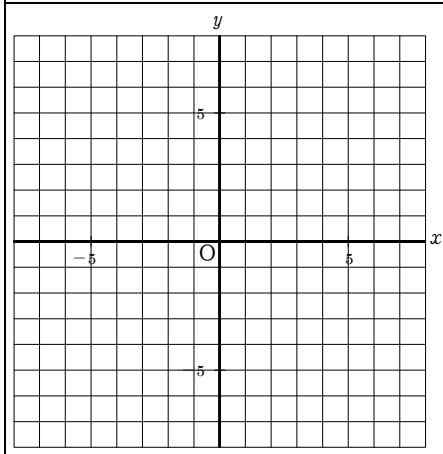
ミニ復習	比例・反比例のグラフ 7
氏名	

① $y = 5x$	② $y = -\frac{3}{4}x$
③ $y = \frac{18}{x}$	



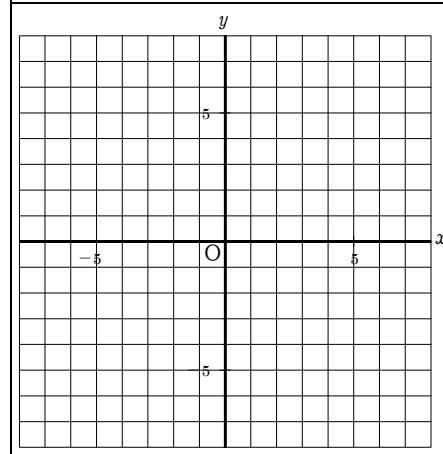
ミニ復習	比例・反比例のグラフ 2
氏名	

① $y = -3x$	② $y = \frac{3}{4}x$
③ $y = -\frac{6}{x}$	



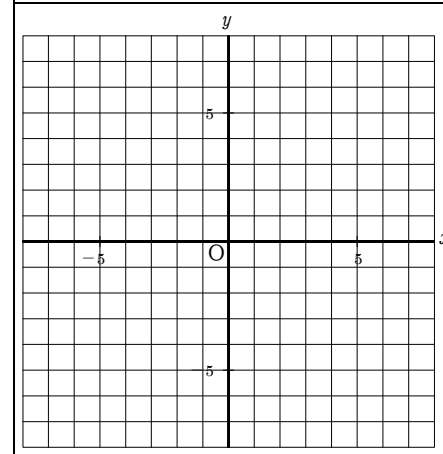
ミニ復習	比例・反比例のグラフ 4
氏名	

① $y = -2x$	② $y = \frac{2}{5}x$
③ $y = -\frac{18}{x}$	



ミニ復習	比例・反比例のグラフ 6
氏名	

① $y = -4x$	② $y = \frac{1}{3}x$
③ $y = -\frac{8}{x}$	



ミニ復習	比例・反比例のグラフ 8
氏名	

① $y = -x$	② $y = \frac{2}{3}x$
③ $y = -\frac{12}{x}$	

