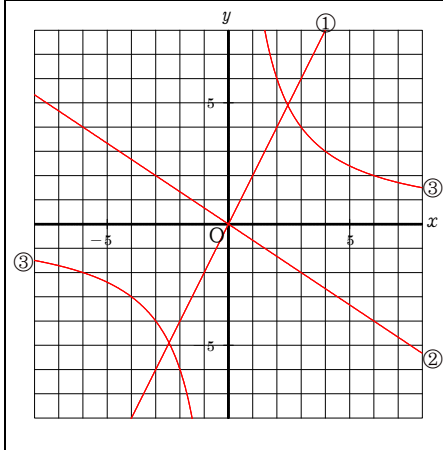


【解答】

ミニ復習 比例・反比例のグラフ 1
氏名

① $y = 2x$ ② $y = -\frac{2}{3}x$

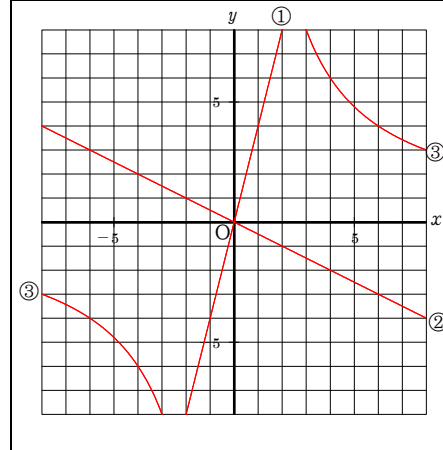
③ $y = \frac{12}{x}$



ミニ復習 比例・反比例のグラフ 3
氏名

① $y = 4x$ ② $y = -\frac{1}{2}x$

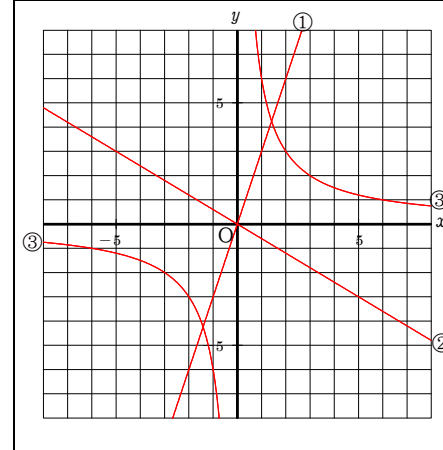
③ $y = \frac{24}{x}$



ミニ復習 比例・反比例のグラフ 5
氏名

① $y = 3x$ ② $y = -\frac{3}{5}x$

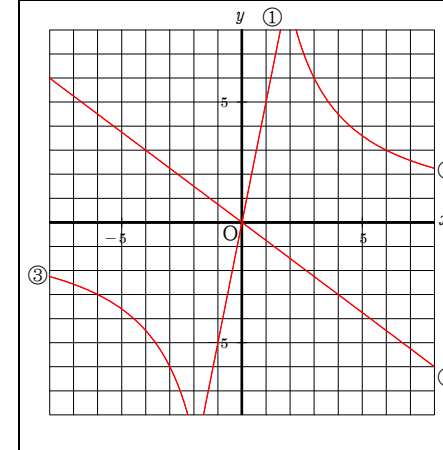
③ $y = \frac{6}{x}$



ミニ復習 比例・反比例のグラフ 7
氏名

① $y = 5x$ ② $y = -\frac{3}{4}x$

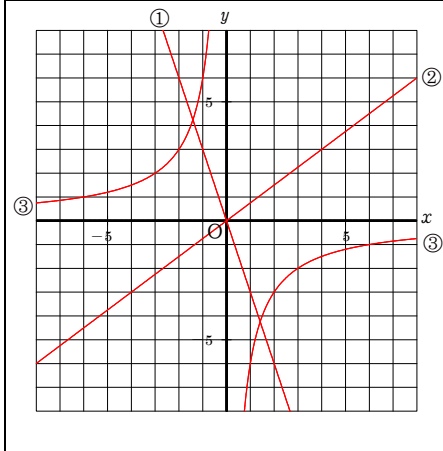
③ $y = \frac{18}{x}$



ミニ復習 比例・反比例のグラフ 2
氏名

① $y = -3x$ ② $y = \frac{3}{4}x$

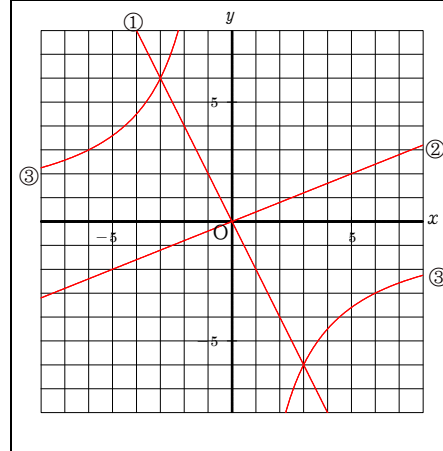
③ $y = -\frac{6}{x}$



ミニ復習 比例・反比例のグラフ 4
氏名

① $y = -2x$ ② $y = \frac{2}{5}x$

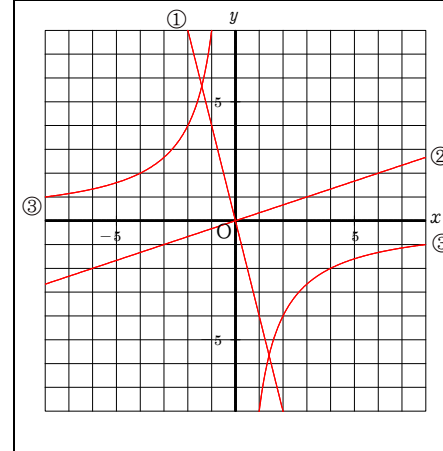
③ $y = -\frac{18}{x}$



ミニ復習 比例・反比例のグラフ 6
氏名

① $y = -4x$ ② $y = \frac{1}{3}x$

③ $y = -\frac{8}{x}$



ミニ復習 比例・反比例のグラフ 8
氏名

① $y = -x$ ② $y = \frac{2}{3}x$

③ $y = -\frac{12}{x}$

