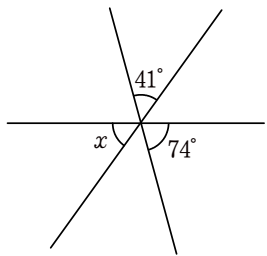


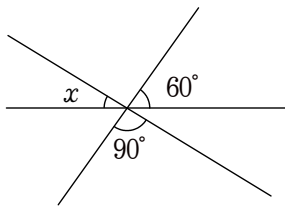
ドリルプリント 2年生「角（平行線・多角形）」 NO. 1 【解答】

◆次の図で、 $\angle x$ の大きさを求めよ。

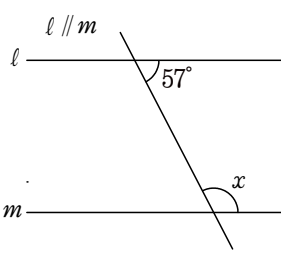
① 65°



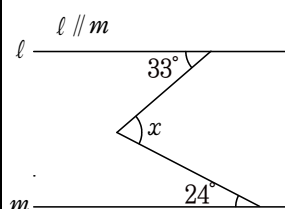
② 30°



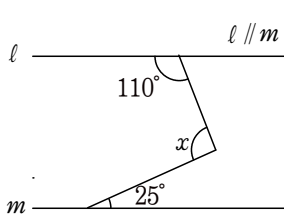
③ 123°



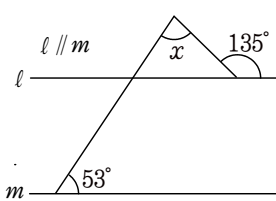
④ 57°



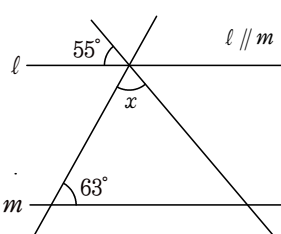
⑤ 95°



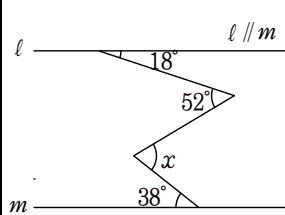
⑥ 82°



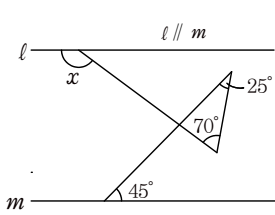
⑦ 62°



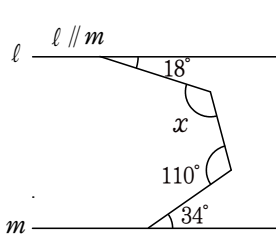
⑧ 72°



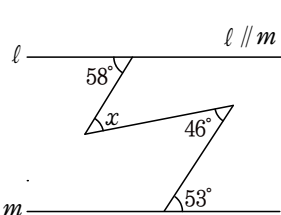
⑨ 140°



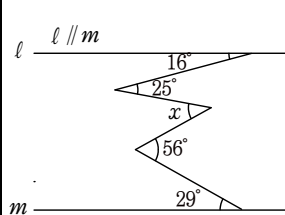
⑩ 122°



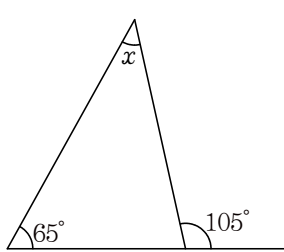
⑪ 51°



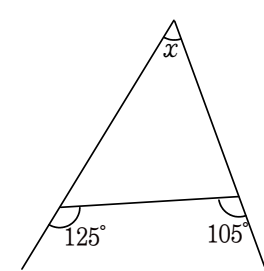
⑫ 36°



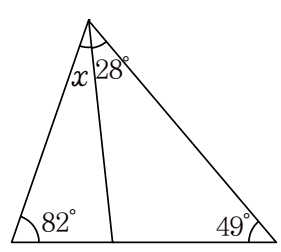
⑬ 40°



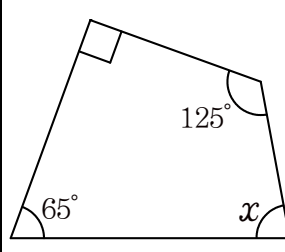
⑭ 50°



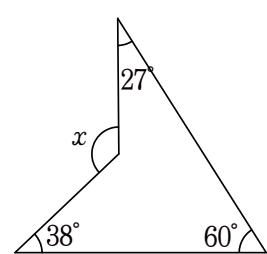
⑮ 21°



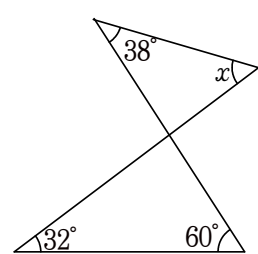
⑯ 80°



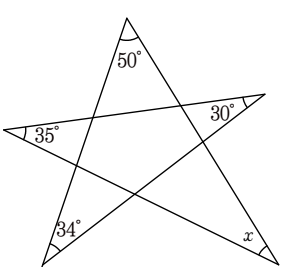
⑰ 125°



⑱ 54°



⑲ 31°



⑳ 112°

